


GOOD LEARNERS

28th November 2014





Monday 19th November

To use Link questions to help remember my writing

(I)

What is a frog cycle of a frog?

Stage 1 frog spawn

Spawning, at the start of a ^{male} frog's life cycle the female adult frog lays a jelly like ~~protection~~ ^{protection} Some eggs called frog spawn. ~~is~~ ^{is} The frog spawn is made up of a black dots ^{that} ~~is~~ ^{essentially} ~~describes~~ ^{describes} to black dots is a ^{clear} jelly like protection. You will find that the frog spawn is usually in the reeds, near the edge of the water or on any path.

Stage 2 tadpoles

After a ~~few weeks~~ ^{ten days to} ~~ten days to~~ ^{few days} ~~later~~ ^A few weeks later, the small black dots ^{and} ~~begin~~ ^{begin} to develop. ^{The} Sun warms the spawning ^{and} ~~the~~ ^{the} dots start changing shape and size. ^{The} baby tad, is ^{with} ~~with~~ ^{mouth}. When the tadpoles have developed they will ~~swim~~ ^{swim} into the water. ST When in the water ~~the~~ ^{the} tadpoles keep changing. ^A few weeks ~~later~~ ^{they} start to breathe through new ~~gills~~ ^{gills} inside their bodies.

Stage 3 froglets

~~The~~ ^{the} ~~new~~ ^{new} ~~frog~~ ^{frog} when they are eight weeks old the tadpoles grow two back legs ~~later~~ ^{later}, when they are eight weeks old, the tadpoles grow two back legs. ~~Now~~ ^{Now} the tadpoles swim to the surface to take gulps of fresh air. ~~Next~~ ^{Next} the tadpoles begin to lose the tadpoles grow ~~front~~ ^{front} legs too. Then the tadpoles tails slowly disappear. The tadpoles have become little frogs. ~~They~~ ^{They} crawl on stones and by ~~leaving~~ ^{leaving} the pond and so on stones and by ~~leaving~~ ^{leaving} the pond.

Stage 4 Adult frogs


~~The~~ ^{the} ~~final~~ ^{final} ~~stage~~ ^{stage} of a frog's life cycle ^{when} ~~the~~ ^{the} tadpoles turn into adult frogs. ~~When~~ ^{When} the leaves start to get green the tadpoles and it begins to get colder. In summer the frogs eat and die, and grow and grow. There is plenty of food around the frogs find a hiding place in piles of leaves or under logs they sleep during winter.

★ ⁺ You need a final sentence to show you have used lots of technical vocabulary in all your paragraphs. ^{The} reader ^{the} link between stage 4 and 1.

★ Explain I like the all of your time connections

★ I think that in the last 3 paragraphs you have used more good sentence devices

By June P



Monday 24th November 2014

Reynon

(1)

To write a witness statement to explain

Critical Learning: To use causal connectives to help explain what happened.

How was Guy Fawkes captured? What happened to him?



first ~~with~~ Lord Montecroce got a letter
 to not to go to the houses of ~~the~~
~~houses~~ something was going to
 happen. Lord Montecroce showed it to his
 friends but they didn't believe him. In the
 afternoon I met the king
 and Guy Fawkes and was there.
 I went later and saw ~~at~~ said
~~he~~ he had got up powder.
 the king was all right
~~because~~ Guy Fawkes wanted to
 blow up the houses.

Tyler used a calculator to help with the

11/11/14


multiplication.

LI: To calculate the area of shapes.

What is the area of this rectangle?

8cm

4cm




$8 \text{ cm} \times 4 \text{ cm} = 32 \text{ cm}^2$

This square has sides of 7cm. What is its area?

7cm

7cm




$7 \times 7 = 49$

What is the total area of these 2 shapes?

6cm


5cm



$30 \text{ cm}^2 + 21 \text{ cm}^2 = 51 \text{ cm}^2$

3cm

7cm

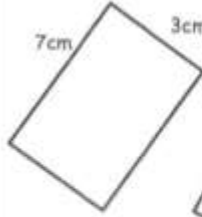


$21 \text{ cm}^2 = 51 \text{ cm}^2$


Colour which of these rectangles has the largest area.

7cm

3cm



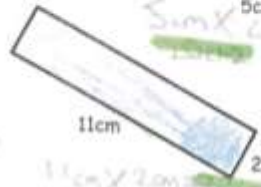
4cm



5cm

11cm

2cm




$7 \text{ cm} \times 3 \text{ cm} = 21 \text{ cm}^2$

$4 \text{ cm} \times 5 \text{ cm} = 20 \text{ cm}^2$

$11 \text{ cm} \times 2 \text{ cm} = 22 \text{ cm}^2$

Find the area of this rectangle

6cm



8cm

$6 \times 8 = 48$

Colour the shape/shapes which have an area of 36 cm^2 .

6cm

6cm



$6 \times 6 = 36$

8cm

8cm



$5 \text{ cm} \times 8 = 40$

4cm

9cm



$11 \times 5 = 55$

11cm

8cm



$9 \text{ cm} \times 6 \text{ cm} = 54$

Fantastic calculating area Tyler!

Monday 24th November 2014

L.T. To write a witness statement to explain.

Critical Learning: To use causal connectives.

LOVE LOA

IAW

How was Guy Fawkes captured? What happened to him?



First, a letter was sent to Lord Monteagle telling him not to go to Parliament on 5th November. ~~we~~ ^{the} ~~letter~~ ^{letter} ~~was~~ ^{was} ~~sent~~ ^{sent} to ~~be~~ ^{be} ~~read~~ ^{read}.



Lord Monteagle took the letter to show his friends ~~but~~ ^{but} ~~they~~ ^{they} ~~thought~~ ^{thought} it was fake.




In the middle of the afternoon, I was asked to search the cellar just in case the letter had been true. We found Guy Fawkes, and even questioned him. ~~but~~ ^{but} ~~he~~ ^{he} ~~did~~ ^{did} ~~not~~ ^{not} ~~see~~ ^{see} the ~~gunpowder~~ ^{gunpowder}.



Later that evening we went back to see if Guy Fawkes was still there. ~~but~~ ^{but} ~~the~~ ^{the} ~~fire~~ ^{fire} ~~was~~ ^{was} ~~found~~ ^{found} ~~the~~ ^{the} ~~gunpowder~~ ^{gunpowder}.



King James was not happy ~~so~~ ^{so} ~~the~~ ^{the} ~~king~~ ^{king} ~~was~~ ^{was} ~~sent~~ ^{sent} ~~to~~ ^{to} ~~the~~ ^{the} ~~tower~~ ^{tower} ~~of~~ ^{of} ~~London~~ ^{London}.



LI: To write a witness statement to explain

Critical Learning: To use causal connectives to help explain what happened.

How was Guy Fawkes captured? What happened to him?



I found a letter was sent to Lord Montague telling him not to go to Parliament.

Montague said a bad was going to happen. He showed his friends that they didn't believe it.

I was sent to check the walls. I found a hole.

I was with a man who told me something was there.

Montague was Guy Fawkes. I was a bit away from I lost it there.

I went back to the cell. I saw the same person with

2.5.111
Hi Tommas an introduction to your WJ
the Relevance

Frogs
Frogs are amphibians and they live
in fresh water. Frogs are cold blooded
which means they can survive
in cold weather. Some frogs are purple,
orange, and lots of other
general colors. Even though frogs
are families are families there are
because there's about 855 species
of frogs. Did you know there is
a frog called a turtle frog.

✓ This is a lovely introduction, you have
included lots of facts and technical vocabu-
lary.

- Use of commas

BEDENHAM NEWS

Date 1852

YOUR DAILY FAVOURITE NEWSPAPER

Price 11

SHOCKED YOUNG COUPLE FOUND DEAD



A small community were very shocked to hear of the death of Romeo Montague and Juliet Capulet.

They were found dead in the Capulet tomb. The bodies were found by the member of Juliet's family early afternoon as they were starting to do their daily clean.

Both families who always ^{were} seen and heard fighting and shouting are comparing each other at this terrible matter.

Romeo and Juliet are going to be buried together.

These families are in discussion about the funeral arrangements.